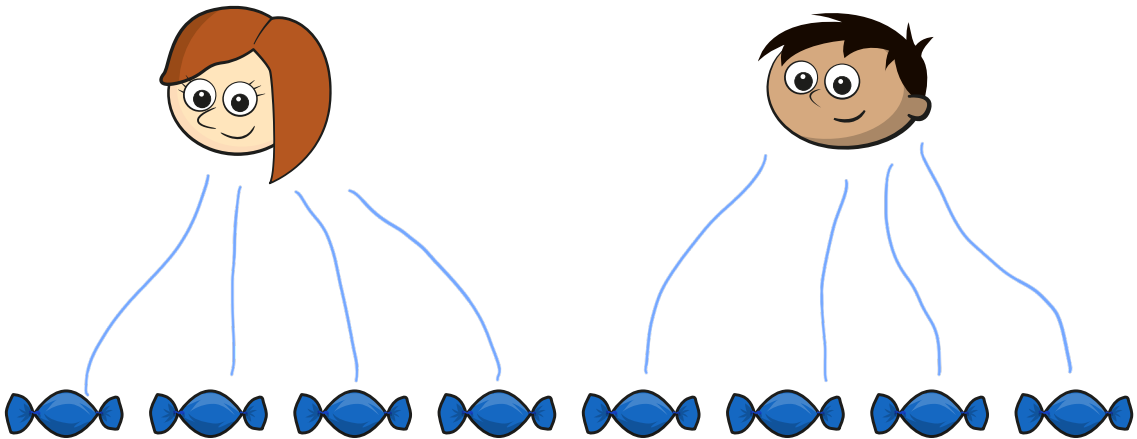


# Make equal groups – sharing

**I** Rosie and Amir are sharing some sweets.



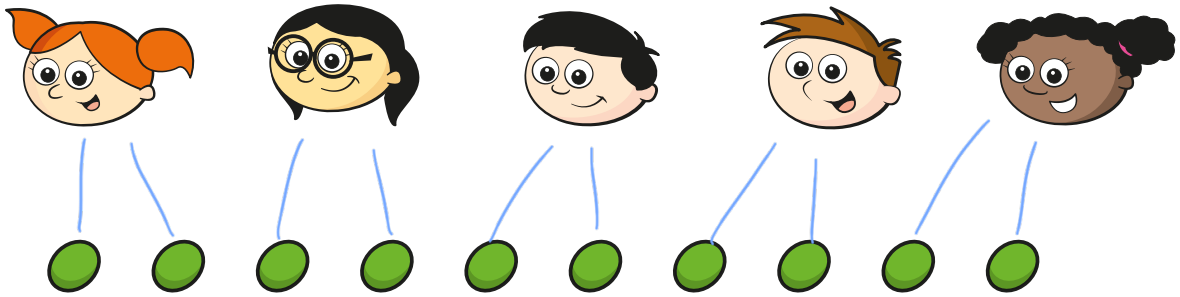
- a) Draw lines to share the sweets equally.
- b) How many sweets does each child get?

Each child gets  sweets.

8 sweets shared equally between 2 is



2 Five children share some grapes.




- a) Draw lines to share the grapes equally.
- b) How many grapes does each child get?

Each child gets  grapes.

10 grapes shared equally between 5 is

3 Ron needs to share 20 bananas between 5 boxes.



How many bananas will there be in each box?


20 bananas shared between 5 boxes is

There will be  bananas in each box.





4 Use 30 counters.



a) Share the counters between 2 friends.

How many counters does each friend get?

15

b) Share the counters between 5 friends.

How many counters does each friend get?

6

c) Share the counters between 10 friends.

How many counters does each friend get?

3